

## SSC MTS 2021 (Held On 6 July 2022 Shift 1)

### Multi Tasking Non Technical Staff Havaldar CBIC and CBN Examination 2021

Roll Number	
Candidate Name	
Venue Name	iON Digital Zone iDZ Asansol
Exam Date	06/07/2022
Exam Time	9:00 AM - 10:30 AM
Subject	MTS Non technical and Havaldar Examination 2021

Section : General English

Q.1 Select the option that corrects the misspelt words in the given sentence.

I can't pitcure him fighting or picking on anyone.

- Ans
- 1. I can't picture him fighting or picking on anyone.
  - 2. I can't pitcure him fiting or piking on anyone.
  - 3. I can't pitcure him fighting or pekking on anyone.
  - 4. I can't pictre him fighting or pickning on anyone.

Question ID : 26433051102  
Status : Answered  
Chosen Option : 1

Q.2 Select the most appropriate option to fill in the blank.

The boys were tired, but not too tired to examine the little hut \_\_\_\_\_.

- Ans
- 1. weirdly
  - 2. weakly
  - 3. thoroughly
  - 4. sluggishly

Question ID : 26433051389  
Status : Answered  
Chosen Option : 3

Q.3 Select the most appropriate option to fill in the blank.

It is better to be prompt and organised than to be \_\_\_\_\_.

- Ans
- 1. provident
  - 2. meaningless
  - 3. efficient
  - 4. reckless

Question ID : 26433050792  
Status : Answered  
Chosen Option : 4

Q.4 Select the option that will improve the underlined part of the sentence. In case no improvement is needed, select 'No improvement required'.

Why doesn't you try calling your family again?

- Ans
- 1. you don't tries
  - 2. doesn't you tried
  - 3. don't you try
  - 4. No improvement required

Question ID : 26433050780  
Status : Answered  
Chosen Option : 3

Q.5 Parts of the following sentence have been given as options. One of them may contain an error. Select the part that contains the error from the given options. If you don't find any error, mark 'No error' as your answer.

The telecom growth story is a important component of the broader story of India.

- Ans
- 1. No error
  - 2. The telecom growth story is
  - 3. the broader story of India.
  - 4. a important component of

Question ID : 26433051080  
Status : Answered  
Chosen Option : 3

Q.6 Select the most appropriate ANTONYM of the underlined word.

Their reverence reaches its zenith here at the birthplace of the country's founder.

- Ans
- 1. crest
  - 2. Nadir
  - 3. horizon
  - 4. pinnacle

Question ID : 26433051688  
Status : Answered  
Chosen Option : 2

Q.7 Select the option that will improve the underlined part of the given sentence. In case no improvement is needed, select 'No improvement required'.

His mouth left open as he realise the truth.

- Ans
- 1. fell open as he perceived
  - 2. felt opened as he perceive
  - 3. was felt opened as he realise
  - 4. No improvement required

Question ID : 26433051620  
Status : Answered  
Chosen Option : 1

**Q.8** The following sentence has been divided into parts. One of them may contain an error. Select the part that contains the error from the given options. If you don't find any error, mark 'No error' as your answer.

Solar storms can / impact Earth-dwellers / in significantly ways.

- Ans
- 1. Solar storms can
  - 2. impact Earth-dwellers
  - 3. No error
  - 4. in significantly ways

Question ID : 26433050949  
Status : Answered  
Chosen Option : 4

**Q.9** Select the option that will improve the underlined part of the given sentence. In case no improvement is needed, select 'No improvement required'.

I noticed some strawberries grown in which of the gardens.

- Ans
- 1. growing in which of
  - 2. grows upon one of
  - 3. No improvement required
  - 4. growing in one of

Question ID : 26433050588  
Status : Answered  
Chosen Option : 4

**Q.10** Select the most appropriate synonym of the given word.

Random

- Ans
- 1. Definite
  - 2. Continuous
  - 3. Systematic
  - 4. Chance

Question ID : 26433050965  
Status : Answered  
Chosen Option : 4

**Q.11** Select the option that can be used as a one-word substitute for the given group of words.

Deliberately and maliciously set something (buildings usually) on fire

- Ans
- 1. Agrarian
  - 2. Arson
  - 3. Ambush
  - 4. Apex

Question ID : 26433051379  
Status : Answered  
Chosen Option : 2

**Q.12** Select the option that will improve the underlined part of the sentence. In case no improvement is needed, select 'No improvement required'.

He stood up from their chair to signal the end of the meeting.

- Ans
- 1. up from his
  - 2. upon of his
  - 3. No improvement required
  - 4. below in their

Question ID : 26433051066  
Status : Answered  
Chosen Option : 1

**Q.13** Select the option that will improve the underlined part of the given sentence. In case no improvement is needed, select 'No improvement required'.

Shubham and I were watching football match in our bedroom.

- Ans
- 1. I were watched
  - 2. I was watching
  - 3. me is watching
  - 4. No improvement required

Question ID : 26433050961  
Status : Answered  
Chosen Option : 4

**Q.14** Select the correctly spelt word.

- Ans
- 1. Influnce
  - 2. Influence
  - 3. Influnace
  - 4. Influnence

Question ID : 26433050945  
Status : Answered  
Chosen Option : 2

**Q.15** Select the most appropriate meaning of the given idiom.

Out for the count

- Ans
- 1. Very expensive
  - 2. Prepared for battle
  - 3. In a deep, insensible sleep
  - 4. Ready for scrutiny

Question ID : 26433051385  
Status : Answered  
Chosen Option : 4

Q.16 Select the option that will improve the underlined part of the given sentence. In case no improvement is needed, select 'No improvement required'.

Although the waters may have receded, the aftermath of one of the world's biggest natural disaster had only just begun.

- Ans  1. the aftermath of one of the world's biggest natural disasters  
 2. No improvement required  
 3. the aftermath of one of the worlds' biggest natural disasters has  
 4. the aftermath of one of the worlds' biggest natural disaster

Question ID : 26433051595  
Status : Answered  
Chosen Option : 1

Q.17 Select the most appropriate synonym of the given word.

Modest

- Ans  1. Bold  
 2. Humble  
 3. Dismal  
 4. Grave

Question ID : 26433051381  
Status : Answered  
Chosen Option : 2

Q.18 The following sentence has been split into four segments. Identify the segment that contains a grammatical error.

Most of the / freshwater lake in India / are in the / Himalayan region.

- Ans  1. Himalayan region  
 2. Most of the  
 3. are in the  
 4. freshwater lake in India

Question ID : 26433051470  
Status : Answered  
Chosen Option : 4

Q.19 Select the most appropriate ANTONYM of the given word.

Refute

- Ans  1. Endorse  
 2. Acknowledge  
 3. Deny  
 4. Dispute

Question ID : 26433050937  
Status : Answered  
Chosen Option : 2

**Q.20** Select the most appropriate meaning of the given idiom.

**Draw the line**

- Ans**  1. To accept someone's idea  
 2. To give a second chance  
 3. To move on from a past relationship  
 4. To set a limit on something

Question ID : 26433050993

Status : **Answered**

Chosen Option : 4

**Comprehension:**

In the following passage, some words have been deleted. Read the passage carefully and select the most appropriate option to fill in each blank.

The Government is taking seriously the (1) \_\_\_\_\_ of road safety and is committed to reducing the number of people killed in accidents. Forums are being conducted (2) \_\_\_\_\_ to bring law-makers, law enforcement officers and road users together to discuss ways to (3) \_\_\_\_\_ the rise in road accidents. Everyone agrees that more needs to be done on road safety in its determination to (4) \_\_\_\_\_ the rate of road accidents in the country. The Government, with the cooperation of relevant agencies, is making serious (5) \_\_\_\_\_ to instil proper road culture in children, young adults and the public in general.

**SubQuestion No : 21**

**Q.21** Select the most appropriate option to fill in blank number 1.

- Ans**  1. release  
 2. residue  
 3. issue  
 4. site

Question ID : 26433051374

Status : **Answered**

Chosen Option : 3

**Comprehension:**

In the following passage, some words have been deleted. Read the passage carefully and select the most appropriate option to fill in each blank.

The Government is taking seriously the (1) \_\_\_\_\_ of road safety and is committed to reducing the number of people killed in accidents. Forums are being conducted (2) \_\_\_\_\_ to bring law-makers, law enforcement officers and road users together to discuss ways to (3) \_\_\_\_\_ the rise in road accidents. Everyone agrees that more needs to be done on road safety in its determination to (4) \_\_\_\_\_ the rate of road accidents in the country. The Government, with the cooperation of relevant agencies, is making serious (5) \_\_\_\_\_ to instil proper road culture in children, young adults and the public in general.

**SubQuestion No : 22**

**Q.22** Select the most appropriate option to fill in blank number 2.

- Ans**  1. regularly  
 2. habitually  
 3. terminally  
 4. rarely

Question ID : 26433051375

Status : **Answered**

Chosen Option : 1

**Comprehension:**

In the following passage, some words have been deleted. Read the passage carefully and select the most appropriate option to fill in each blank.

The Government is taking seriously the (1) \_\_\_\_\_ of road safety and is committed to reducing the number of people killed in accidents. Forums are being conducted (2) \_\_\_\_\_ to bring law-makers, law enforcement officers and road users together to discuss ways to (3) \_\_\_\_\_ the rise in road accidents. Everyone agrees that more needs to be done on road safety in its determination to (4) \_\_\_\_\_ the rate of road accidents in the country. The Government, with the cooperation of relevant agencies, is making serious (5) \_\_\_\_\_ to instil proper road culture in children, young adults and the public in general.

**SubQuestion No : 23**

**Q.23** Select the most appropriate option to fill in blank number 3.

- Ans  1. confess  
 2. tackle  
 3. conduct  
 4. deal

Question ID : 26433051376

Status : Answered

Chosen Option : 2

**Comprehension:**

In the following passage, some words have been deleted. Read the passage carefully and select the most appropriate option to fill in each blank.

The Government is taking seriously the (1) \_\_\_\_\_ of road safety and is committed to reducing the number of people killed in accidents. Forums are being conducted (2) \_\_\_\_\_ to bring law-makers, law enforcement officers and road users together to discuss ways to (3) \_\_\_\_\_ the rise in road accidents. Everyone agrees that more needs to be done on road safety in its determination to (4) \_\_\_\_\_ the rate of road accidents in the country. The Government, with the cooperation of relevant agencies, is making serious (5) \_\_\_\_\_ to instil proper road culture in children, young adults and the public in general.

**SubQuestion No : 24**

**Q.24** Select the most appropriate option to fill in blank number 4.

- Ans  1. curb  
 2. lure  
 3. incite  
 4. promote

Question ID : 26433051377

Status : Answered

Chosen Option : 1

**Comprehension:**

In the following passage, some words have been deleted. Read the passage carefully and select the most appropriate option to fill in each blank.

The Government is taking seriously the (1) \_\_\_\_\_ of road safety and is committed to reducing the number of people killed in accidents. Forums are being conducted (2) \_\_\_\_\_ to bring law-makers, law enforcement officers and road users together to discuss ways to (3) \_\_\_\_\_ the rise in road accidents. Everyone agrees that more needs to be done on road safety in its determination to (4) \_\_\_\_\_ the rate of road accidents in the country. The Government, with the cooperation of relevant agencies, is making serious (5) \_\_\_\_\_ to instil proper road culture in children, young adults and the public in general.

**SubQuestion No : 25****Q.25** Select the most appropriate option to fill in blank number 5.

- Ans  1. acknowledgements  
 2. powers  
 3. efforts  
 4. struggles

Question ID : 26433051378  
Status : Answered  
Chosen Option : 3

Section : **General Intelligence and Reasoning****Q.1** Select the number from the given options that can replace the question mark (?) in the following series.

205, 222, 241, 264, 293, ?

- Ans  1. 346  
 2. 324  
 3. 328  
 4. 334

Question ID : 26433048844  
Status : Answered  
Chosen Option : 2

**Q.2** In a certain code language, 'TYR' is coded as '65', and 'GAP' is coded as '26'. How will 'MOJ' be coded in that language?

- Ans  1. 40  
 2. 41  
 3. 38  
 4. 39

Question ID : 26433048945  
Status : Answered  
Chosen Option : 1



Q.3 Select the option that is related to the sixth word in the same way as the first word is related to the second word and the third word is related to the fourth word.

Speech : Dumb :: Sight : Blind :: ? : Deaf

- Ans  1. Sound  
 2. Vibrations  
 3. Voice  
 4. Language

Question ID : 26433048094  
Status : Answered  
Chosen Option : 1

Q.4 In a certain code language, 'Floors white marble' is written as 'tp aj pr', 'Tyre are hard white' is written as 'pr qs tr ak' and 'Marble are shiny' is written as 'tp tr 6'. What is the code for 'Shiny floors' in that code language?

- Ans  1. tr aj  
 2. 6 ak  
 3. aj 6  
 4. 6 pr

Question ID : 26433048798  
Status : Answered  
Chosen Option : 3

Q.5 Which of the mathematical signs should be interchanged in the given equation to make it mathematically correct?

$$31 \div 14 \times 9 + 3 - 7 = 66$$

- Ans  1.  $\div$  and  $+$   
 2.  $+$  and  $\times$   
 3.  $-$  and  $\times$   
 4.  $-$  and  $+$

Question ID : 26433048336  
Status : Answered  
Chosen Option : 1

Q.6 Select the option in which the two numbers are related in the same way as are the numbers in the give number pair.

31 : 48

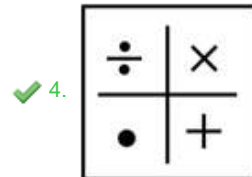
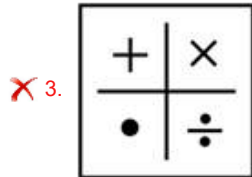
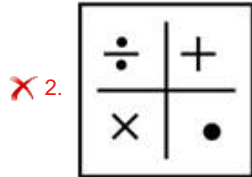
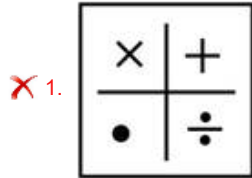
- Ans  1. 29 : 44  
 2. 43 : 62  
 3. 53 : 74  
 4. 37 : 54

Question ID : 26433048742  
Status : Answered  
Chosen Option : 4

Q.7 Select the figure from among the given options that can replace the question mark (?) in the following series.

$\frac{+}{\times}$	$\frac{\bullet}{\div}$	$\frac{\times}{\div}$	$\frac{+}{\bullet}$	$\frac{\bullet}{+}$	$\frac{\div}{\times}$	$\frac{\div}{\bullet}$	$\frac{\times}{+}$	?
--------------------	------------------------	-----------------------	---------------------	---------------------	-----------------------	------------------------	--------------------	---

Ans



Question ID : 26433048484

Status : Answered

Chosen Option : 4

Q.8 Read the given statements and conclusions carefully. Assuming that the information given in the statements is true, even if it appears to be at variance with commonly known facts, decide which of the given conclusions logically follow(s) from the statements.

Statements:

Some tablets are laptops.

Some laptops are computers.

Conclusions:

I. Some tablets are computers.

II. Some laptops are not tablets.

Ans ✗ 1. Only conclusion I follows.

✗ 2. Both conclusions I and II follow.

✓ 3. Neither conclusion I nor II follows.

✗ 4. Only conclusion II follows.

Question ID : 26433048305

Status : Answered

Chosen Option : 3

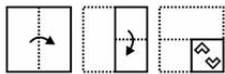
**Q.9** Select the option that is related to the fifth number in the same way as the second number is related to the first number and the fourth number is related to the third number.

16: 38:: 26: 58:: 37: ?

- Ans
- 1. 78
  - 2. 76
  - 3. 74
  - 4. 80

Question ID : 26433048308  
 Status : Answered  
 Chosen Option : 4

**Q.10** The sequence of folding a piece of paper and the manner in which the folded paper has been cut is shown in the following figures. How would this paper look when unfolded?



- Ans
- 1.
  - 2.
  - 3.
  - 4.

Question ID : 26433048637  
 Status : Answered  
 Chosen Option : 1

**Q.11** Select the option that is related to the fifth letter-cluster in the same way as the second letter-cluster is related to the first letter-cluster and the fourth letter-cluster is related to the third letter-cluster.

GOOD : HSXT :: BEST : CIBJ :: COOL : ?

- Ans
- 1. DSSB
  - 2. DSXZ
  - 3. DSZB
  - 4. DSXB

Question ID : 26433048295  
 Status : Answered  
 Chosen Option : 4

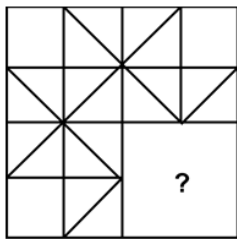
Q.12 Select the option in which the pair of letter-clusters share the same relationship as that shared by the given pair of letter-clusters.

MOB : KMZ :: ?

- Ans
- 1. AJK : YHN
  - 2. LOP : JMN
  - 3. BND : DLB
  - 4. STB : PRZ

Question ID : 26433048949  
Status : Answered  
Chosen Option : 2

Q.13 Select the figure from the options that can replace the question mark (?) and complete the pattern.



Ans

- 1.
- 2.
- 3.
- 4.

Question ID : 26433048067  
Status : Answered  
Chosen Option : 1

Q.14 Select the option figure in which the given figure is embedded.



Ans

✗ 1.



✓ 2.



✗ 3.



✗ 4.



Question ID : 26433048760

Status : Answered

Chosen Option : 2

Q.15 In a certain code language, 'CYLINDER' is written as 'CYLJNDFR', 'CERTAIN' is written as 'CFRTBJN', and 'PURPOSE' is written as 'PVRPPSF'. How will 'QUEUEING' be written in that language?

Ans ✗ 1. QFVJVJNG

✗ 2. QVFVEJNG

✗ 3. RVFVEJNG

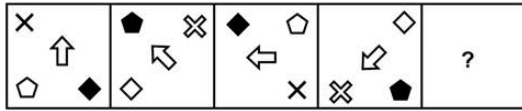
✓ 4. QVFVFJNG

Question ID : 26433048097

Status : Answered

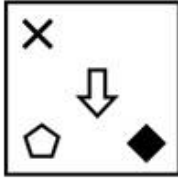
Chosen Option : 4

Q.16 Select the figure from among the given options that can replace the question mark (?) in the following series.



Ans

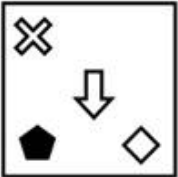
✓ 1.



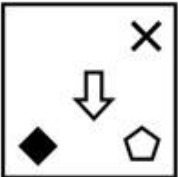
✗ 2.



✗ 3.



✗ 4.



Question ID : 26433048312

Status : Answered

Chosen Option : 1

Q.17 Read the given statements and conclusions carefully. Assuming that the information given in the statements is true, even if it appears to be at variance with commonly known facts, decide which of the given conclusions logically follow(s) from the statements.

Statements:

- I. Some blue are red.
- II. Some green are red.

Conclusions:

- I. No blue is green.
- II. No red is green.

- Ans
- ✗ 1. Only conclusion I follows
  - ✗ 2. Both conclusions I and II follow
  - ✗ 3. Only conclusion II follows
  - ✓ 4. Neither conclusion I nor II follows

Question ID : 26433048753

Status : Answered

Chosen Option : 4

Q.18 In a certain code language, '587' is written as 'see good pictures', '539' is written as 'good and beautiful', and '967' is written as 'pictures are beautiful'. What is the code for the word 'see' in that language?

- Ans  1. 8  
 2. 7  
 3. 6  
 4. 5

Question ID : 26433048074  
Status : Answered  
Chosen Option : 1

Q.19 Select the option that can replace the question mark (?) in the following series.

B, D, G, L, S, ?

- Ans  1. E  
 2. F  
 3. D  
 4. C

Question ID : 26433048318  
Status : Answered  
Chosen Option : 3

Q.20 Seven boys J, M, N, K, P, L and O sit in a row facing the South (but not necessarily in the same order). K sits fifth to the left of J. K does not sit at any of ends. L sits exactly in the middle of the row. L sits third to the right of M. Only two boys sit between O and P. O is not the immediate neighbour of L.

Three of the following are similar by a certain logic and form a group. Which of the following does NOT belong to that group?

- Ans  1. NJ  
 2. PN  
 3. LO  
 4. KM

Question ID : 26433048856  
Status : Answered  
Chosen Option : 4

Q.21 After interchanging the two numbers 3 and 6, what will be the value of the given expression?

$$12 \times 3 \div 6 + 8 - 2$$

- Ans  1. 15  
 2. 25  
 3. 30  
 4. 20

Question ID : 26433048839  
Status : Answered  
Chosen Option : 3

Q.22 Select the option that is related to the fifth number in the same way as the second number is related to the first number and the fourth number is related to the third number.

23 : 72 :: 38 : 117 :: 46 : ?

Ans  1. 138

2. 156

3. 141

4. 122

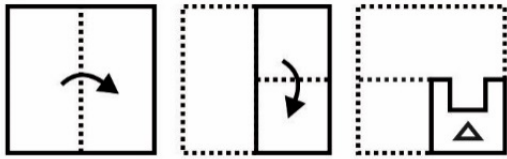
Question ID : 26433048478

Status : Answered

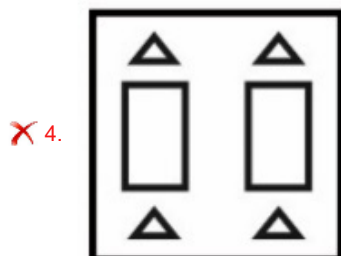
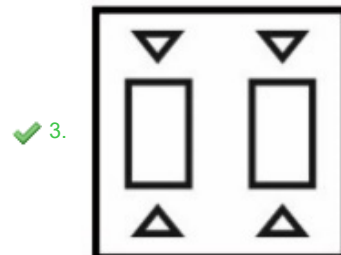
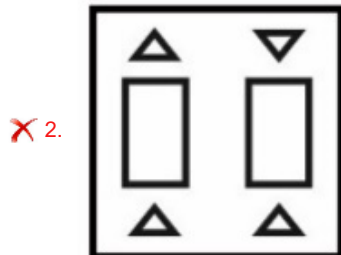
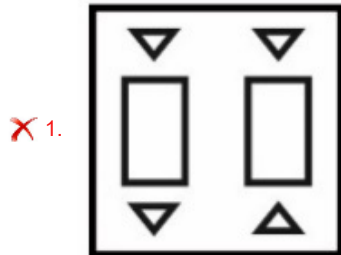
Chosen Option : 3



**Q.23** The sequence of folding a piece of paper and the manner in which the folded paper has been cut is shown in the following figures. How would this paper look when unfolded?



Ans



Question ID : 26433048887  
 Status : Answered  
 Chosen Option : 3

Q.24 The weight of seven boys B1, B2, B3, B4, B5, B6 and B7 are compared. The weight of B5 is less than only one boy and more than that of B6. The weight of B4 is neither more nor less than B6 but more than B1, B7, B3. Who weighs the most?

- Ans
- 1. B5
  - 2. B2
  - 3. B6
  - 4. B1

Question ID : 26433048857  
Status : Answered  
Chosen Option : 2

Q.25 Seven sisters, Anita, Babita, Sunita, Dixita, Rita, Lalita and Geeta are standing in a row facing north. Lalita is standing to the immediate right of Rita who stands fourth to the right of Geeta. Only Sunita stands exactly between Babita and Dixita. Dixita stands at the middle position. Who stands at the rightmost position?

- Ans
- 1. Lalita
  - 2. Anita
  - 3. Geeta
  - 4. Sunita

Question ID : 26433048472  
Status : Answered  
Chosen Option : 2

Section : Numerical Aptitude

Q.1 If  $A = \frac{1}{2} + \frac{1}{3} \times \frac{1}{4} \div \frac{1}{5} - \frac{1}{6}$  and  $B = \frac{1}{2} \div \frac{1}{3} \times \frac{1}{4} + \frac{1}{5}$ , then what is the value of  $A - B$ ?

- Ans
- 1.  $\frac{17}{20}$
  - 2.  $\frac{9}{20}$
  - 3.  $\frac{7}{40}$
  - 4.  $\frac{1}{5}$

Question ID : 26433049814  
Status : Answered  
Chosen Option : 3

**Q.2** The perimeter of a square is equal to the perimeter of a rectangle, and the latter has a width of 12 cm. The area of the square is 400 cm<sup>2</sup>. Find the area of the rectangle.

- Ans**
- 1. 412 cm<sup>2</sup>
  - 2. 394 cm<sup>2</sup>
  - 3. 324 cm<sup>2</sup>
  - 4. 336 cm<sup>2</sup>

Question ID : 26433049517  
Status : Answered  
Chosen Option : 4

**Q.3** In a competitive exam, the minimum qualifying percentages for Category A and Category B jobs are 25% and 45%, respectively. A candidate scored 83 marks and failed to get a Category B job by 25 marks. What is the minimum qualifying marks to secure a Category A job?

- Ans**
- 1. 55
  - 2. 60
  - 3. 50
  - 4. 65

Question ID : 26433050074  
Status : Answered  
Chosen Option : 2

**Q.4** If  $\frac{32 \div 16 - 5 \times 2}{11 \div 22 \times 8 - 5 \times 2} = \frac{1}{P}$ , then what is the value of P?

- Ans**
- 1.  $\frac{4}{3}$
  - 2.  $\frac{5}{4}$
  - 3.  $\frac{3}{4}$
  - 4.  $\frac{4}{5}$

Question ID : 26433049663  
Status : Answered  
Chosen Option : 3

**Q.5** If the total surface area of a sphere of radius r cm is equal to the total surface area of a cube of side s cm, which of the following is true?

- Ans**
- 1.  $r > s$
  - 2.  $r \geq s$
  - 3.  $r = s$
  - 4.  $r < s$

Question ID : 26433050341  
Status : Answered  
Chosen Option : 4

**Q.6** The average salary of 12 employees in a company was recorded to be ₹20,000. If the salary of the manager is also included, then the average salary increases by ₹2,000. Find the salary of the manager.

- Ans**
- 1. ₹36,000
  - 2. ₹46,000
  - 3. ₹28,000
  - 4. ₹42,000

Question ID : 26433049497  
Status : Answered  
Chosen Option : 2

**Q.7** Umesh earns a simple interest of ₹1,600 on a certain sum in two years at the rate of 4% per annum. How much more interest would he have earned if he had invested the same sum at 4% interest per annum, compounded annually?

- Ans**
- 1. ₹48
  - 2. ₹64
  - 3. ₹32
  - 4. ₹20

Question ID : 26433050082  
Status : Answered  
Chosen Option : 3

**Q.8** The average of a set of 20 numbers is P. If one of the numbers from the set is replaced with 58, then the average becomes (P - 2). What is the value of the number that is replaced?

- Ans**
- 1. 98
  - 2. 94
  - 3. 60
  - 4. 104

Question ID : 26433049679  
Status : Answered  
Chosen Option : 1

**Q.9** The diameter of a circle is 112 cm. What is the circumference of this circle? [Use  $\pi = \frac{22}{7}$ ]

- Ans**
- 1. 256 cm
  - 2. 396 cm
  - 3. 416 cm
  - 4. 352 cm

Question ID : 26433049659  
Status : Answered  
Chosen Option : 4

**Q.10** If the selling price of a shirt is reduced from ₹440 to ₹410, the loss increases by 4%. What is the cost price of the shirt?

- Ans**
- 1. ₹650
  - 2. ₹750
  - 3. ₹450
  - 4. ₹500

Question ID : 26433050076  
Status : Answered  
Chosen Option : 2

**Q.11** The marked price of a table is 130% of its cost price. A discount of 20% is given on the sale of the table. What will be the profit percentage?

- Ans**
- 1. 6%
  - 2. 8%
  - 3. 5%
  - 4. 4%

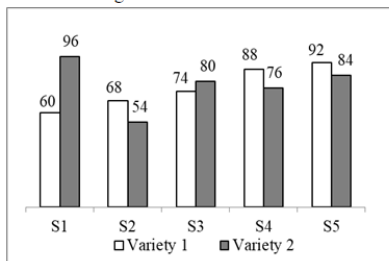
Question ID : 26433049674  
Status : Answered  
Chosen Option : 4

**Q.12** A fan is sold for ₹1,560 at a profit of 30%. If its selling price is ₹960, then what will be the loss percentage?

- Ans**
- 1. 30%
  - 2. 20%
  - 3. 10%
  - 4. 25%

Question ID : 26433049648  
Status : Answered  
Chosen Option : 2

**Q.13** The bar chart given below shows the number of tea packets of 2 varieties sold by 5 shops during a particular week.



What is the average number of tea packets sold per shop, both the varieties take together?

- Ans**
- 1. 154.4
  - 2. 152.8
  - 3. 157.6
  - 4. 149.2

Question ID : 26433049816  
Status : Answered  
Chosen Option : 1

**Q.14** S is 20% more than T. T is 10% less than U. What is the ratio of S to U?

- Ans**
- 1. 27 : 25
  - 2. 23 : 19
  - 3. 25 : 21
  - 4. 29 : 24

Question ID : 26433049700  
Status : Answered  
Chosen Option : 1

**Q.15** P<sub>1</sub> alone can do  $\frac{2}{3}$  of the work in 8 days. P<sub>2</sub> alone can do  $\frac{7}{12}$  of the work in 14 days. P<sub>3</sub> alone can do  $\frac{5}{15}$  of the work in 16 days. In how many days can they complete the work, if all three work together?

- Ans**
- 1.  $\frac{60}{19}$  days
  - 2.  $\frac{120}{19}$  days
  - 3.  $\frac{100}{17}$  days
  - 4.  $\frac{80}{17}$  days

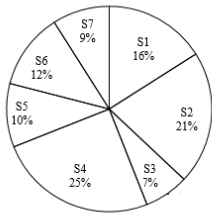
Question ID : 26433049643  
Status : Answered  
Chosen Option : 2

**Q.16** The LCM of two positive integers is twice the larger number and the HCF of the two numbers is 3. The smaller number is:

- Ans**
- 1. 6
  - 2. 10
  - 3. 9
  - 4. 8

Question ID : 26433050070  
Status : Answered  
Chosen Option : 1

**Q.17** The following pie chart shows the number of bags sold by 7 different shops during a month as percentages of the total number of bags sold during this month by these 7 shops taken together.



If the total number of bags sold during the given month by these 7 shops taken together was 1400, then what was the total number of bags sold by S3 and S7 taken together?

- Ans**
- 1. 240
  - 2. 196
  - 3. 224
  - 4. 210

Question ID : 26433049667  
Status : Answered  
Chosen Option : 3

**Q.18** The average weight of A, B, and C is 52 kg. If the average weight of B and C is 44 kg and that of C and A is 46 kg, then what will be the weight of C?

- Ans**
- 1. 24 kg
  - 2. 38 kg
  - 3. 36 kg
  - 4. 68 kg

Question ID : 26433050321  
Status : Answered  
Chosen Option : 1

**Q.19** The speed of a boat in still water is 10 km/h. The speed of the stream is 2 km/h. What is the total distance that the boat will travel if it is rowed for 4 hours upstream and 3 hours downstream?

- Ans**
- 1. 70 km
  - 2. 72 km
  - 3. 64 km
  - 4. 68 km

Question ID : 26433049795  
Status : Answered  
Chosen Option : 4

**Q.20** The table below shows the number of overs bowled and the number of wickets taken by five bowlers in a match.

Bowler	Overs	Wickets
Jadeja	8	3
Jaspreet	6	2
Bumrah	5	1
Pandya	4	3
Ashwin	6	1

If in each over every bowler bowled 6 balls, in that match which bowler had bowled the highest number of balls per wicket taken by him?

- Ans**
- 1. Jadeja
  - 2. Bumrah
  - 3. Ashwin
  - 4. Jaspreet

Question ID : 26433050187  
Status : Answered  
Chosen Option : 3

**Q.21** What number must be subtracted from each of the numbers 55, 23, 43 and 19, so that the new values are in proportion?

- Ans**
- 1. 9
  - 2. 11
  - 3. 7
  - 4. 5

Question ID : 26433049805  
Status : Answered  
Chosen Option : 3

**Q.22** The price of diesel increases by 5% every year. If the current price of diesel is ₹80 per litre, then what will be the price of diesel per litre after 2 years?

- Ans**
- 1. ₹86.8
  - 2. ₹92.5
  - 3. ₹90.5
  - 4. ₹88.2

Question ID : 26433049682  
Status : Answered  
Chosen Option : 4



**Q.23** A person has some coins of ₹10, ₹5, and ₹2 denominations. The ratio of the products of the numbers of ₹10 and ₹5 coins, the numbers of ₹5 and ₹2 coins, and the numbers of ₹2 and ₹10 coins is 3 : 4 : 2 respectively. What could be the minimum amount of money this person has?

- Ans**
- 1. ₹52
  - 2. ₹88
  - 3. ₹68
  - 4. ₹74

Question ID : 26433050180  
Status : Answered  
Chosen Option : 3

**Q.24** A can do a piece of work alone in 30 days. B is 25% less efficient than A, while C is  $33\frac{1}{3}\%$  more efficient than B. In how many days can A, B and C, working together, complete the work?

- Ans**
- 1.  $\frac{150}{11}$  days
  - 2.  $\frac{120}{11}$  days
  - 3.  $\frac{140}{11}$  days
  - 4.  $\frac{130}{11}$  days

Question ID : 26433050044  
Status : Answered  
Chosen Option : 2

**Q.25** A man can row downstream at a speed of 15 km/h and upstream at 11 km/h. Find his speed in still water and the speed of the current, respectively. [Give both your answers in km/h]

- Ans**
- 1. 13; 5
  - 2. 11; 4
  - 3. 13; 2
  - 4. 13; 6

Question ID : 26433050184  
Status : Answered  
Chosen Option : 3

Section : General Awareness

**Q.1** Alluri Sitaram Raju was a tribal freedom fighter from which state of India?

- Ans**
- 1. Bihar
  - 2. Maharashtra
  - 3. Andhra Pradesh
  - 4. Gujarat

Question ID : 26433047058  
Status : Answered  
Chosen Option : 3

Q.2 Which country will host the FIFA World Cup 2022?

- Ans
- 1. China
  - 2. South Africa
  - 3. Qatar
  - 4. England

Question ID : 26433047490  
Status : Answered  
Chosen Option : 3

Q.3 भारत में इनमें से किस संस्था द्वारा एक रुपये के करेंसी नोट और सिक्के निर्गत किए जाते हैं?

- Ans
- 1. इंपीरियल बैंक ऑफ इंडिया
  - 2. भारतीय औद्योगिक वित्त निगम
  - 3. वित्त मंत्रालय
  - 4. सेंट्रल बैंक ऑफ इंडिया

Question ID : 26433047092  
Status : Answered  
Chosen Option : 1

Q.4 Which of the following elements has the largest atomic radii?

- Ans
- 1. Beryllium
  - 2. Lithium
  - 3. Nitrogen
  - 4. Carbon

Question ID : 26433047573  
Status : Answered  
Chosen Option : 2

Q.5 Who won a gold medal for India in the javelin throw event at Tokyo Olympics 2020?

- Ans
- 1. Sumit Antil
  - 2. Shivpal Singh
  - 3. Neeraj Chopra
  - 4. Ajeet Singh Yadav

Question ID : 26433047069  
Status : Answered  
Chosen Option : 3

**Q.6** In which type of Megalith (grave/memorial) were the stone pieces set in a circular shape around the grave?

- Ans**  1. Cairn circle  
 2. Dolmen  
 3. Rock cut cave  
 4. Menhir

Question ID : 26433047081  
Status : **Answered**  
Chosen Option : 1

**Q.7** Who among the following was Akbar's revenue minister?

- Ans**  1. Tansen  
 2. Todar Mal  
 3. Raja Man Singh  
 4. Birbal

Question ID : 26433047482  
Status : **Answered**  
Chosen Option : 2

**Q.8** The feature of Fundamental Rights in the Indian Constitution is borrowed from the Constitution of \_\_\_\_\_.

- Ans**  1. Australia  
 2. Britain  
 3. Ireland  
 4. United States of America

Question ID : 26433047488  
Status : **Answered**  
Chosen Option : 4

**Q.9** Sundari trees are found in the \_\_\_\_\_.

- Ans**  1. Mahanadi delta  
 2. Ganga-Brahmaputra delta  
 3. Godavari delta  
 4. Muthupet delta

Question ID : 26433047729  
Status : **Answered**  
Chosen Option : 2

Q.10 In which state of India is the Natyanjali festival celebrated?

- Ans  1. Goa  
 2. Tamil Nadu  
 3. Uttar Pradesh  
 4. Rajasthan

Question ID : 26433047571  
Status : Answered  
Chosen Option : 2

Q.11 The number of females per 1000 males in the population is called the \_\_\_\_\_.

- Ans  1. birth rate  
 2. sex ratio  
 3. death rate  
 4. literacy rate

Question ID : 26433047477  
Status : Answered  
Chosen Option : 2

Q.12 Who is the author of the book 'Gone Girl'?

- Ans  1. Damon Galgut  
 2. Gillian Flynn  
 3. Yann Martel  
 4. Anna Burns

Question ID : 26433047085  
Status : Answered  
Chosen Option : 4

Q.13 \_\_\_\_\_ includes all non-living components, such as air, cloud, dust, land, mountains, rivers, temperature, humidity, water, water vapour, sand, etc.

- Ans  1. Biotic environment  
 2. Abiotic environment  
 3. Artificial environment  
 4. Healthy environment

Question ID : 26433047050  
Status : Answered  
Chosen Option : 1

Q.14 Name the album for which Pandit Ravi Shankar won the Grammy award in 1967.

- Ans  1. Three Ragas  
 2. West Meets East  
 3. Concert for Bangladesh  
 4. Full circle

Question ID : 26433047086  
Status : Answered  
Chosen Option : 1

Q.15 The state legislative assembly has a strength of \_\_\_\_, with exceptions for smaller states.

- Ans  1. 600 to 1000  
 2. 60 to 500  
 3. 50 to 400  
 4. 10 to 100

Question ID : 26433047064  
Status : Answered  
Chosen Option : 3

Q.16 Who among the following freedom fighters of India revived the Indian National Army 'Azad Hind Fauj' (which was formed in 1942 by Rash Behari Bose and Captain-General Mohan Singh) in the year 1943?

- Ans  1. Mahatma Gandhi  
 2. Jawaharlal Nehru  
 3. Bhagat Singh  
 4. Subhas Chandra Bose

Question ID : 26433047209  
Status : Answered  
Chosen Option : 4

Q.17 Sattriya is a classical dance form of which Indian state?

- Ans  1. Manipur  
 2. Karnataka  
 3. Assam  
 4. Kerala

Question ID : 26433047195  
Status : Answered  
Chosen Option : 1

Q.18 Which countries hosted the matches played in the 2021 ICC Men's T20 World Cup?

- Ans  1. Egypt and Ethiopia  
 2. India and Bangladesh  
 3. United Arab Emirates and Oman  
 4. Bangladesh and Sri Lanka

Question ID : 26433047115  
Status : Answered  
Chosen Option : 3

Q.19 Which of the following rivers of India drains into the Bay of Bengal?

- Ans  1. Tapi  
 2. Godavari  
 3. Narmada  
 4. Mahi

Question ID : 26433047053  
Status : Answered  
Chosen Option : 2

Q.20 Who among the following Indian dancers was the first woman in Indian history to be nominated as a member of the Rajya Sabha?

- Ans  1. Rukmini Devi Arundale  
 2. Madhuri Dixit  
 3. Mallika Sarabhai  
 4. Saroj Khan

Question ID : 26433047062  
Status : Answered  
Chosen Option : 1

Q.21 The Jagananna Smart Township scheme was launched by which state government of India?

- Ans  1. Madhya Pradesh  
 2. Punjab  
 3. Odisha  
 4. Andhra Pradesh

Question ID : 26433047468  
Status : Answered  
Chosen Option : 3

Q.22 As of April 2022, what is the capital of India's neighbouring country Bhutan?

- Ans  1. Thimphu  
 2. Dhaka  
 3. Beijing  
 4. Paro

Question ID : 26433046905  
Status : Answered  
Chosen Option : 1

Q.23 Which of the following glands/organs in human body secretes bile juice?

- Ans  1. Pancreas  
 2. Liver  
 3. Pituitary  
 4. Pineal

Question ID : 26433047200  
Status : Answered  
Chosen Option : 2

Q.24 Bonalu is a Hindu festival celebrated to worship Goddess Mahakali in which of the following states?

- Ans  1. Telangana  
 2. Assam  
 3. Kerala  
 4. Madhya Pradesh

Question ID : 26433047472  
Status : Answered  
Chosen Option : 2

Q.25 The steep rocky coast rising almost vertically above sea water is called \_\_\_\_\_.

- Ans  1. sea caves  
 2. sea cliff  
 3. sea arches  
 4. ox-bow lake

Question ID : 26433047476  
Status : Answered  
Chosen Option : 2